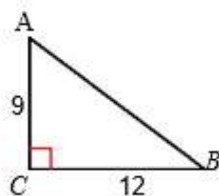


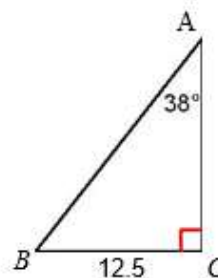
Solve the Triangle station

Find the missing side and angle measures for each triangle. Round answers to the nearest tenth where appropriate.

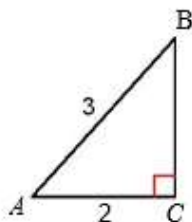
1)



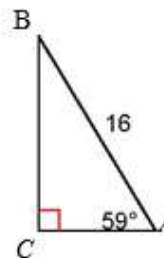
2)



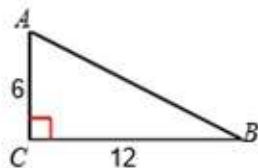
3)



4)



5)



6)

