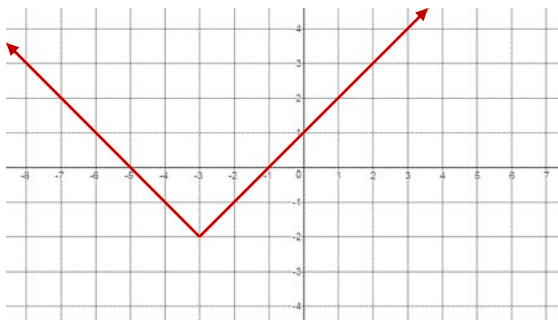
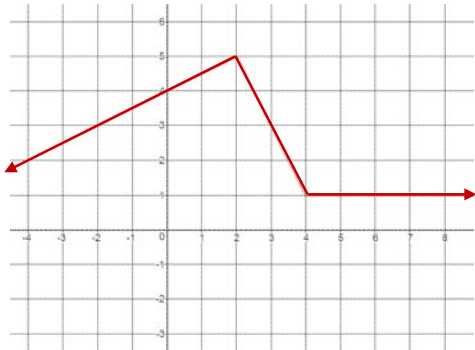


#1



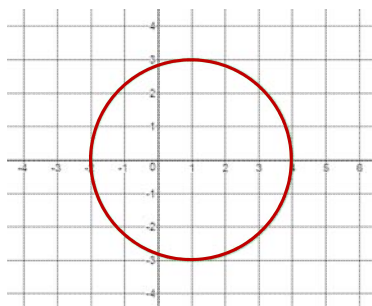
- X-intercept(s): _____
- Y-intercept: _____
- Increasing interval(s): _____
- Decreasing interval(s): _____
- Relative max/min: _____
- Absolute max/min: _____
- Symmetry (if any) _____

#2



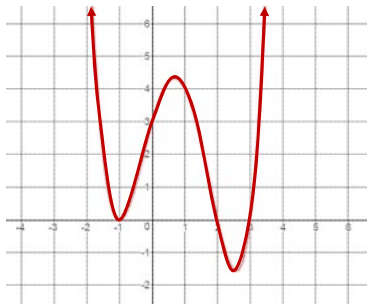
- X-intercept(s): _____
- Y-intercept: _____
- Increasing interval(s): _____
- Decreasing interval(s): _____
- Relative max/min: _____
- Absolute max/min: _____
- Symmetry (if any) _____

#3



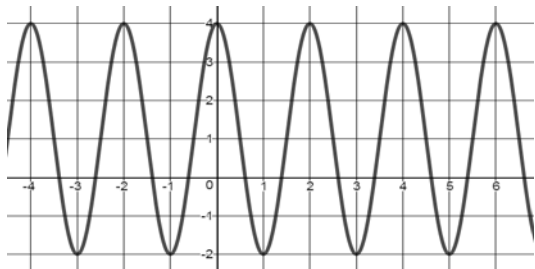
- X-intercept(s): _____
- Y-intercept: _____
- Increasing interval(s): _____
- Decreasing interval(s): _____
- Relative max/min: _____
- Absolute max/min: _____
- Symmetry (if any) _____

#4



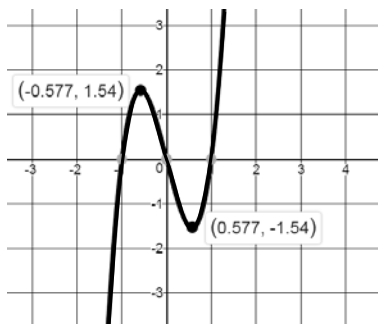
- X-intercept(s): _____
- Y-intercept: _____
- Increasing interval(s): _____
- Decreasing interval(s): _____
- Relative max/min: _____
- Absolute max/min: _____
- Symmetry (if any) _____

#5



- X-intercept(s): _____
- Y-intercept: _____
- Increasing interval(s): _____
- Decreasing interval(s): _____
- Relative max/min: _____
- Absolute max/min: _____
- Symmetry (if any) _____

#6



- X-intercept(s): _____
- Y-intercept: _____
- Increasing interval(s): _____
- Decreasing interval(s): _____
- Relative max/min: _____
- Absolute max/min: _____
- Symmetry (if any) _____